

# Population Dynamics: Predator/Prey

## Student Version

In this lab you will simulate how the populations of the wolves and bunnies will change over time depending on the growth of the other. This is to help you understand how population dynamics works and also occurs with other animals in nature. You could also think about the population dynamics in the human life, though as you can imagine, it is different from animals.

### Key Concepts:

- The number of living organisms in a certain region, such as a meadow, is known as a *population*.
- The ways in which the populations change with time are known as *population dynamics*. A population of bunnies, for instance, may increase due to reproduction or migration of other bunnies from nearby meadows. The population may decrease if they run out of food.
- The prey is the animal being eaten or hunted by another animal, such as the bunny, who is eaten by the wolf.
- A predator is an animal that preys on another for food - such as a wolf, who enters the meadow and eats bunnies, (the bunny population will decrease).
- The predators' populations also change with time, and they depend on the amount of bunnies in the meadow. This lab explores the population dynamics of wolves and bunnies that live in a meadow together.
- In reality, resources are limited. Carrying capacity is the number of individuals a given area and its resources can support.
- We use graph to indicate how the numbers of individuals in different populations change over time; exponential growth, logarithmic growth, linear growth, oscillating growth, etc.




Figure 1. The Meadow.

# Population Dynamics Simulation

The wolves (large squares) will be randomly dropped onto the meadow (large sheet) covered in bunnies (small squares) to represent wolves catching and eating bunnies, which is necessary for the wolves to survive and reproduce. This process will be repeated for 20 rounds, and in each round, a varying number of wolves will be dropped onto a varying population of bunnies. The populations of wolves and bunnies in each round will depend on the previous round's results.

It is necessary to assume certain requirements for both species' survival and reproduction. In this simulation, we will use the following assumptions:

- **A bunny does not survive** if it is “eaten” by wolves, represented by a wolf touching or partially covering that bunny after being thrown onto the meadow.
- **A bunny reproduces** (generates a single additional bunny in the next round) only if, after the entire population of wolves is thrown onto the meadow, it has not been eaten. However, once the bunny population reaches a total of 75, no more bunnies can reproduce.
- **If no bunnies are left surviving after a round**, three new bunnies repopulate the meadow by migration for the next round.
- **A wolf does not survive** if, after being thrown onto the meadow, it has eaten (is touching or partially covering) two or less bunnies.
- **A wolf reproduces** if it eats 3 or more bunnies after a single throw into the meadow. It generates an additional wolf in the next round for every multiple of 3 bunnies that it is partially covering. (*Example: 3 bunnies = 1 wolf, 6 bunnies = 2 wolves, 9 bunnies = 3 wolves*).
- **If no wolves survive a round**, a single new wolf migrates to the meadow, and attempts to catch bunnies in the next round.


All of these assumptions are included in the calculations within the Excel workbook, “Predator\_Prey\_Worksheet.xls”, so you don't need to keep track of all the rules as you play. Simply follow the “Specific Tasks” outlined below.

Divide your group of two to three students into the roles of Data Manager, Bunny Manager, and Wolf Manager. Either Bunny or Wolf Manager can take the role of the Data Manager as well, if needed.

1. (Data Manager) Open the Microsoft Excel workbook “Predator\_Prey\_Worksheet.xls”. The yellow cells under the “Bunnies Caught” headings will be the only cells you will be altering. **Do not change any other cells**, as they will affect the accuracy of the calculations this data sheet will be conducting. There will be only 1 wolf in Round 1. (Only the first cell will be filled on the first column.)

2. (Bunny Manager) Randomly (without aiming!) scatter 3 bunnies across the meadow.

3. (Wolf Manager) Randomly (without aiming!) drop 1 wolf.



4. (Bunny) Remove the wolf and all the bunnies eaten by the wolf, i.e. any small piece slightly or more covered by the large piece. Leave the live bunnies where they are.

5. (Data) Record the number of bunnies eaten by that wolf in the yellow cell to the right of the “Wolf 1” label in the “Bunnies Caught” column of Round 1.

6. (Data) From the Excel sheet, read out “Bunnies to Add” (in orange) and “Wolves to Start” (in green) underneath the Round 2 heading.

7. (Bunny) Now we’re on the second round. Randomly drop the number of bunnies as read off from the Excel sheet. Scatter them across the meadow where the survivor bunnies from the previous round are still roaming.

8. (Wolf) Randomly drop the number of wolves as read off from the Excel sheet, one wolf at a time over various parts of the meadow. After each wolf, remove and record the number of bunnies it has eaten in the appropriate cell of the “Bunnies Caught” column of Round 2. Then drop the next wolf and record its bunnies caught. Repeat until you have dropped all the “Wolves to Start” as indicated in the Excel Sheet. In the early rounds, there will be many empty yellow cells in each column, because the wolf population has yet to grow much.

9. Repeat steps 6-8 for 20 total rounds. You may keep the bunnies outside the meadow in piles of 5. This will make it easier to figure out the quickly multiplying numbers of bunnies to add.

## Concept Questions

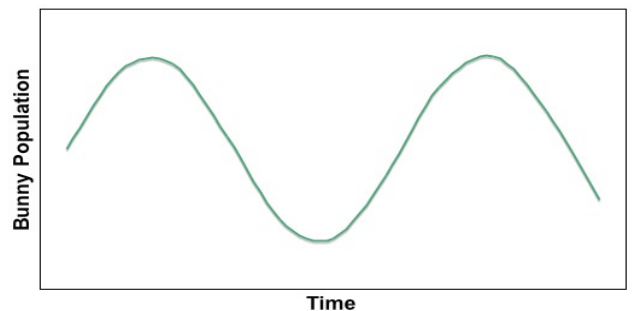
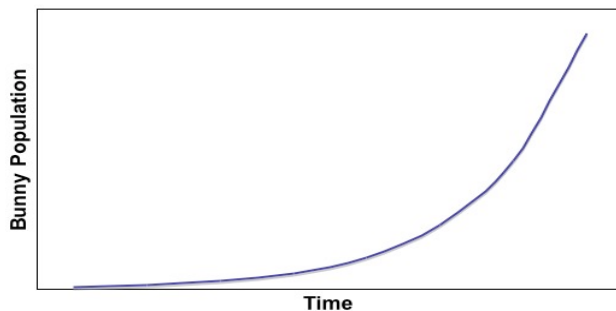
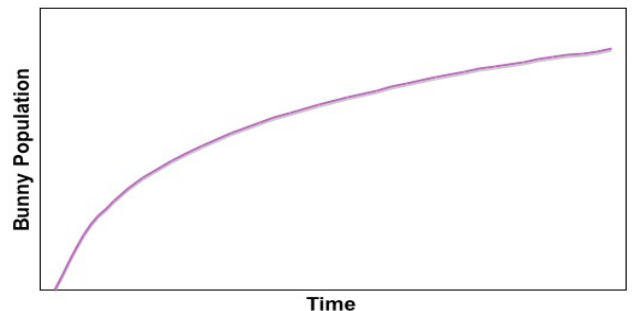
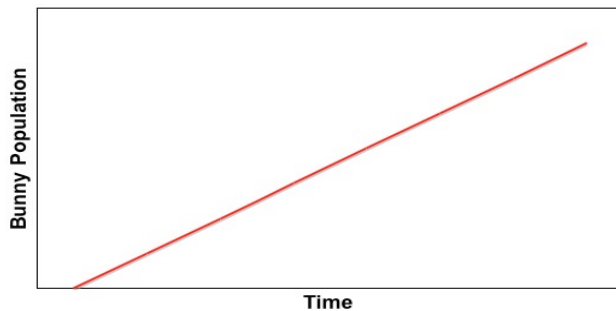
Open the sheet "Results Plot" in the Excel Workbook. This shows the populations of wolves and bunnies throughout the rounds. Either print out the plot that is shown, or describe and sketch it.

What happens to the bunny population when the wolf population increases?

What happens to the wolf population when the bunny population decreases?

Does the wolf population ever outnumber the bunny population? \_\_\_\_\_ For how long? If this period of time is very short compared to the entire simulation, why do you think that is the case?

Which graph from below (a, b, c, or d) best illustrates the bunny population if there are no predators, but there are unlimited resources? \_\_\_\_\_ Which one most closely illustrates the results of the simulation you just performed? \_\_\_\_\_



*In our simulation we chose to limit the total number of bunnies to 75. What might limit the bunny population in real life?*

*Look at the population plots generated by other groups in the class. Do their plots look the same as yours? In what ways, if any, are they different?*

*What do you think would happen to the wolves and the bunnies if you introduced an additional predator, such as a coyote, which required fewer bunnies to reproduce?*

*Do humans have predators? What kinds of things might limit our population?*

*We are predators. What kinds of things might we prey upon? (Think of our everyday lifestyle, not just what we eat.)*

**References:**

Gatton, M. *Predator-Prey Population Dynamics*, Professional Performing Arts School, New York, NY.  
Adapted from: <http://educ.queensu.ca/%7Escience/main/concept/biol/b11/B11LACG2.htm>,